

DESIGNS WITH COMPASSES




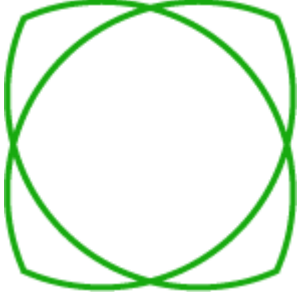
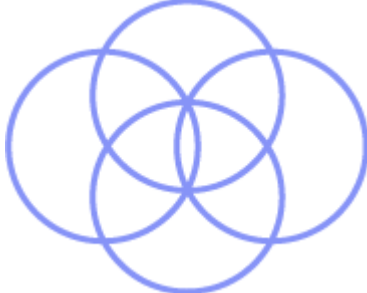
TASK 1 Use a pair of compasses

Use a pair of compasses to draw the circles with the measurements given.

<p>Radius of 3 cm</p>	<p>Radius of 2.5 cm</p>	<p>Diameter of 4 cm</p>
------------------------------	--------------------------------	--------------------------------

TASK 2 Draw patterns

Select at least two of these designs and use a pair of compasses to construct your own versions accurately.

Use your compasses to create your own patterns using circles.